

MAKING CHANGE

KS1 – 2001 Paper

1.

Ellen has a **£5** note.

She spends **£1.99**

33 Draw a ring around each coin she gets in her change.

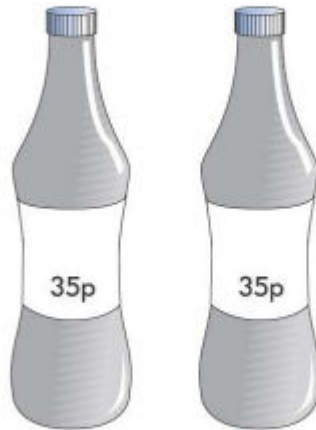


KS1 – 2002 Paper

2.

Anya has **£2**

She buys **2** drinks costing **35p each**.



31 How much money does she have left?


Show how you work it out in the box.

£

22

Sita had **£10**

She spent **£2.35**



How much money did she have left?

£






Each toy costs **25p**

Jack buys **6** toys.

How much **change** does he get from **£2.00**?

Show how you work it out in the box.

25



35p

Amy buys **one** pear for 35p.

She pays with a 50p coin.



How much change does Amy get?

p

1 mark

KS1 – 2019 Paper – Reasoning

6.

32

Ben has **90p**.

He buys **2** tickets.

Each ticket costs **35p**.

How much money does Ben have **left**?

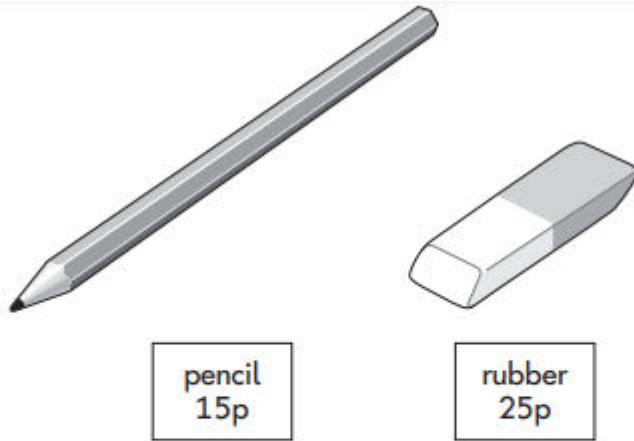


p

2 marks

7.

28



Kemi has **£1**

She buys a **pencil** and a **rubber**.

How much **change** does Kemi get from **£1**?

Show  
your  
working

A large rectangular box for showing working. In the bottom right corner of this box, there is a smaller blue-outlined rectangular box containing the letter 'p'.

2 marks